

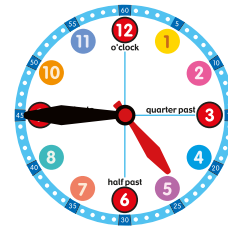
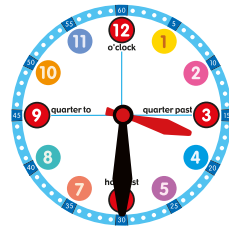
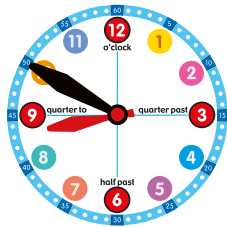
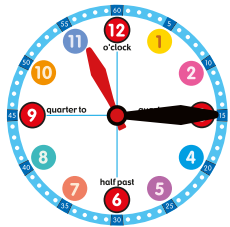


Time Activities

See if you can complete these time activities. Draw lines between the clock faces and digital clocks which show the same times, then fill in the blank spaces under the clocks. Finally, draw the clock hands on each clock face.

Match the times

Draw a line between the same times



2:00 P.M.

3:30 P.M.

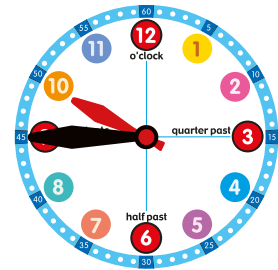
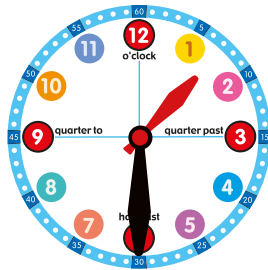
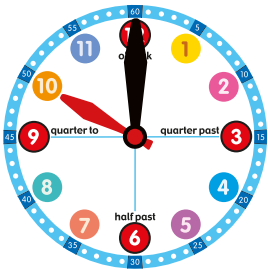
11:15 A.M.

4:45 P.M.

8:50 A.M.

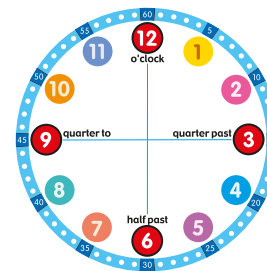
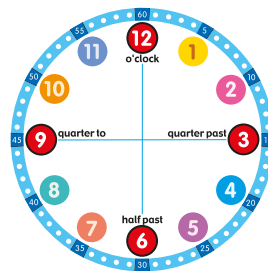
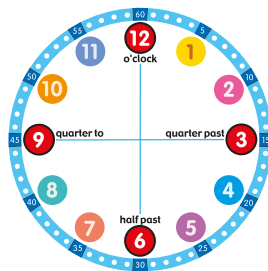
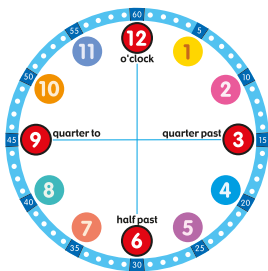
Write the time

Write the times shown on the clock faces



Draw the clock hands

Draw the clock hands for each clock



12.30pm

7.00pm

4.45am

2.50am